

(Answer key)

Level 1 - Review Summer packet

	1	2	3	4	5	6	7	8
A	$8+3$	$8-3$	$19+4$	$19-4$	$16+5$	$16-5$	$14+2$	$14-2$
	11	5	23	15	21	11	16	12
B	$11+5$	$11-5$	$11+2$	$11-2$	$11+3$	$11-3$	$11+4$	$11-4$
	16	6	13	9	14	8	15	7
C	$10+7$	$10-7$	$0+6$	$10-6$	$10+5$	$10-5$	$10+2$	$10-2$
	17	3	6	4	15	5	12	8
D	$9+3$	$9-3$	$9+5$	$9-5$	$9+7$	$9-7$	$9+0$	$9-0$
	12	6	14	4	16	2	9	9
E	$11+2$	$11-2$	$11+5$	$11-5$	$11+1$	$11-1$	$11+0$	$11-0$
	13	9	16	6	12	10	11	11
F	$10+5$	$10-5$	$10-7$	$10+7$	$10-3$	$10+3$	$10+4$	$10-4$
	15	5	3	17	7	13	14	6
G	$16+4$	$16-4$	$16+5$	$16-5$	$17-5$	$17+5$	$18+4$	$18-4$
	20	12	21	11	12	22	22	14
H	$13-12$	$13-10$	$13-8$	$13-7$	$13-0$	$13-11$	$13-9$	$13-5$
	1	3	5	6	13	2	4	8

2)

c1

c2

c3

a)

	T	U
	4	3
+	2	4
	6	7

	T	U
	4	7
+	2	1
	6	8

	T	U
	4	0
+	3	0
	7	0

b)

	T	U
	3	6
+	2	7
	6	3

	T	U
	4	6
+	3	7
	8	3

	T	U
	7	5
+	1	5
	9	0

c)

	T	U
	4	4
+	3	6
	8	0

	T	U
	3	8
+	2	2
	6	0

	T	U
	4	3
+	2	7
	7	0

d)

	T	U
	2	8
+	8	2
	1	0

	T	U
	4	5
+	6	5
	1	0

	T	U
	3	4
+	7	6
	1	0

3) C1 C2 C3

a)

	T	U
	6	0
-	2	0
	4	0

	T	U
	4	0
-	1	0
	3	0

	T	U
	9	0
-	3	0
	6	0

b)

	T	U
	4	8
-	1	6
	3	2

	T	U
	3	9
-	2	4
	1	5

	T	U
	4	4
-	2	2
	2	2

c)

	T	U
	8	3
-		2
	8	1

	T	U
	4	9
-		5
	4	4

	T	U
	6	6
-		6
	6	0

d)

	T	U
	7	4
-	2	2
	5	2

	T	U
	8	3
-	1	2
	7	1

	T	U
	9	9
-	7	1
	2	8



4)  $8 + 3 = \underline{11}$

$11 + 4 = \underline{15}$

b)  $3 + 7 = \underline{10}$

$20 - 5 = \underline{15}$

c)  $11 - 6 = \underline{5}$

$10 + 5 = \underline{15}$

d)  $8 + 7 = \underline{15}$

$11 - 11 = \underline{0}$

5) Show four different ways of making 8 (Answers May Vary)

Show four different ways of making 11 (Answers May Vary)

a)  $4 + 4 = 8$

$5 + 6 = 11$

b)  $8 - 0 = 8$

$11 + 0 = 11$

c)  $2 + 6 = 8$

$8 + 3 = 11$

d)  $10 - 2 = 8$

$13 - 2 = 11$

6)

3 tens =  $30$

3 hundreds =  $300$

7 tens =  $70$

5 hundreds =  $500$

9 tens =  $90$

2 hundreds =  $200$

7) Manny saw 14 frogs in a pond. 10 frogs hop away. How many frogs are left in the pond? Write a number sentence.

$$\begin{array}{r} 14 \\ - 10 \\ \hline 04 \end{array}$$

4 Frogs



8)

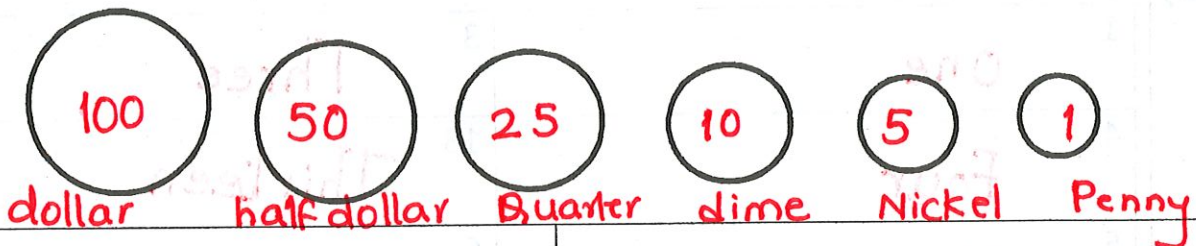
100 Pennies make a dollar.

10 Pennies make a dime.

50 Pennies make half a dollar.

5 Pennies make a nickel.

25 Pennies make a quarter.



9)

7 dollars equals 700 pennies

5 dollars equals 500 pennies

Answer: 700

Answer: 500

10)

Jenny has 8 apples. Pat has 13 apples. How many more apples does Pat have than Jenny?



Sammy has 4 more apples than Matt. Matt has 7 apples. How many apples does Sammy have?



11)

For each set, place a square  around the largest number. Circle  the smallest number.

a)  79, 22, 45, 22, 65, 55,  2

b) 23,  87, 16, 15, 72,  3, 18

c) 99, 18, 25, 43,  100, 34,  16

12) Underline the digit in the <u>unit's</u> place	Underline the digit in the <u>Ten's</u> place
a ) 4 2 <u>3</u>	a ) 6 <u>4</u> 2
b ) 2 4 <u>0</u>	b ) 2 <u>2</u> 4
c ) 1 4 <u>2</u>	c ) 4 <u>2</u> 7
d ) 6 8 <u>0</u>	d ) 6 <u>5</u> 4

13) Spell the numbers	
1 One	3 Three
4 Four	13 Thirteen
5 Five	6 Six
8 Eight	11 Eleven
9 Nine	10 Ten.

14) Rose has 13 photos in a photo album and 10 photos in a box. How many photos does Rose have?

$\begin{array}{r} 13 \\ 10 \\ \hline 23 \end{array}$		<p>23 Photos</p>
--	--	------------------

15) Fill in the numbers that would make each number sentence correct.	
a) $2 + \underline{6} = 8$	$\underline{4} + 6 = 10$
b) $5 + \underline{4} = 9$	$\underline{6} + 7 = 13$
c) $3 + \underline{8} = 11$	$\underline{4} + 8 = 12$
d) $4 + \underline{6} = 10$	$\underline{7} + 3 = 10$

<p>16) Write in <u>number</u> form:</p> <p>a) 3 tens and 3 ones = <u>33</u></p> <p>b) 4 tens and 8 ones = <u>48</u></p> <p>c) 3 tens and 7 ones = <u>37</u></p>	<p>Write in <u>number</u> form:</p> <p>3 tens and 5 ones = <u>35</u></p> <p>6 tens and 2 ones = <u>62</u></p> <p>6 tens and 3 ones = <u>63</u></p>
<p>17) What number comes <u>before</u></p> <p>a) 70      <u>69</u></p> <p>b) 35      <u>34</u></p> <p>c) 49      <u>48</u></p>	<p>What number comes <u>after</u></p> <p>70      <u>71</u></p> <p>49      <u>50</u></p> <p>77      <u>78</u></p>

18) Draw tally marks for

<p>12</p>	<p>20</p>
-----------	-----------

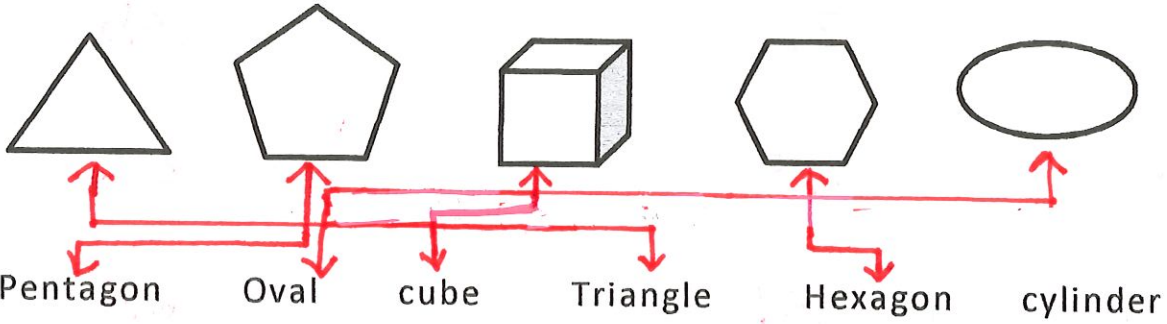
19) Match the names to the shapes

Square      Rhombus      Trapezoid      circle      Triangle



20)

Match the names to the shapes



21)

Take away 7 from 17

$$17 - 7$$

10

b)

What comes after twenty?

$$20 + 1$$

21

c)

What comes after Tuesday?

Wednesday

Wed

d)

How many hands does a clock have?

2 or 3

2 or 3

e)

What shape is a ball?

Answers May Vary

Sphere / Circle

f)


What shape is the window?

Answers May Vary

Rectangle / Square

g)

Draw 15 triangles



22)

You have 4 oranges, 3 apples and 7 Kiwis. How many fruits do you have in all?

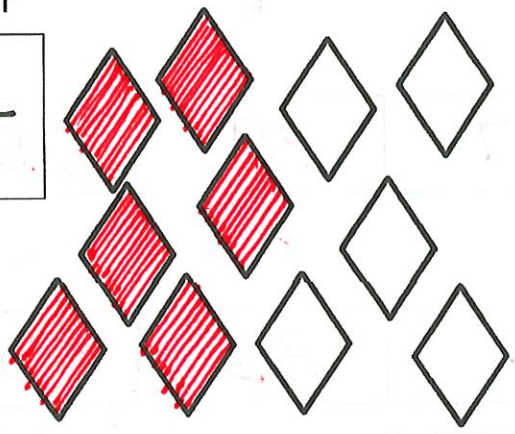
+	4	Oranges	o o o o
	3	Apples	a a a
	7	Kiwis	k k k k k k k
	14		

14 Fruits

23)


Color

$$\frac{6}{11}$$



Color


$$\frac{4}{10}$$



24)

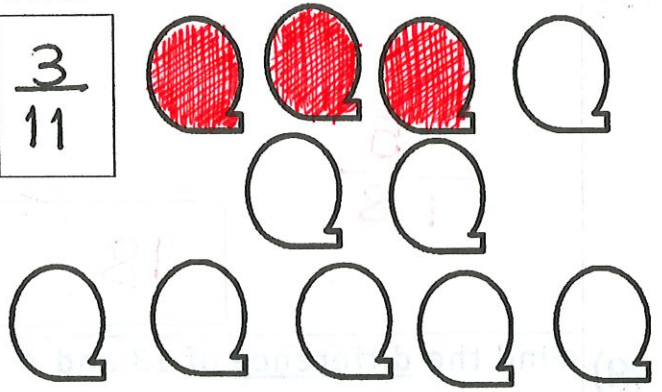
Color

$$\frac{7}{9}$$



Color

$$\frac{3}{11}$$



25)

Arrange from smallest to largest.

40, 60, 30, 50, 20

a)

20	30	40	50	60
----	----	----	----	----

5, 54, 42, 33, 72

b)

5	33	42	54	72
---	----	----	----	----

26)

3 hundred + 4 hundred = 7 hundred

4 hundred + 2 hundred = 6 hundred

27) Arrange from largest to smallest.

48, 63, 39, 47, 25

a)

63	48	47	39	25
----	----	----	----	----

55, 33, 42, 20, 62

b)

62	55	42	33	20
----	----	----	----	----

28) Find the sum of 13 and 5

$$\begin{array}{r} 13 \\ + 5 \\ \hline 18 \end{array}$$

18

Find the sum of 6 and 13

$$\begin{array}{r} 6 \\ + 13 \\ \hline 19 \end{array}$$

19

29) Find the difference of 13 and 7

$$\begin{array}{r} 13 \\ - 7 \\ \hline 6 \end{array}$$

6

Find the difference of 16 and 7

$$\begin{array}{r} 16 \\ - 7 \\ \hline 9 \end{array}$$

9

30) Count by 3's

a)

3	6	9	12	15
---	---	---	----	----

Count by 5's

b)

5	10	15	20	25
---	----	----	----	----

Count by 10's

c)

10	20	30	40	50
----	----	----	----	----



31) Say whether A.M or P. M?

a) Mandy is getting back home from work  
P.M

b) Daddy just woke up  
A.M

c) Andy is sleeping  
P.M or A.M

d) It is dark in the room  
P.M

e) Bella is watching TV  
P.M or A.M

What time is it?



6:00

(f)



1:00

(g)



10:00

(h)

32) Take away 7 from 15


$$\begin{array}{r} 15 \\ - 7 \\ \hline \end{array}$$



8

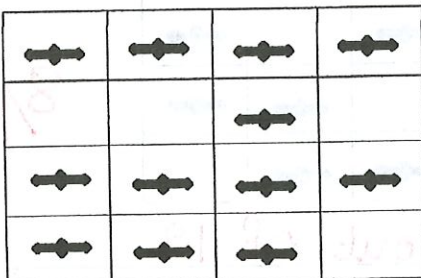
Take away 11 from 19

$$\begin{array}{r} 19 \\ - 11 \\ \hline \end{array}$$



8

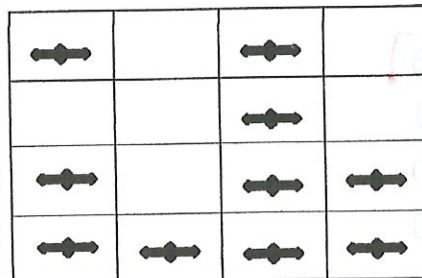
33) What fraction is filled (a)



$\frac{12}{16}$

12 out of 16

What fraction is filled (b)



$\frac{10}{16}$

10 out of 16

34) a) 6 tens + 2 tens = 8 tens

b) 2 tens + 2 tens = 4 tens

c) 7 tens + 0 tens = 7 tens

35) The largest 1 digit number is 9

e) The smallest 1 digit number is 1

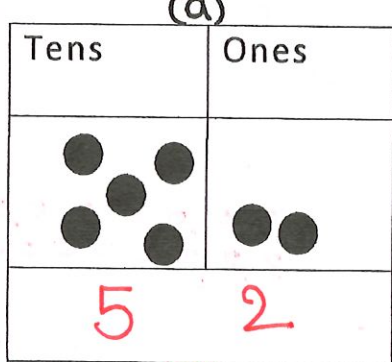
f) The largest 2 digit number is 99

g) The smallest 2 digit number is 10

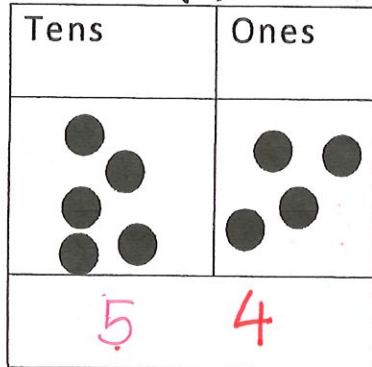
h) The largest 3 digit number is 999

i) The smallest 3 digit number is 100

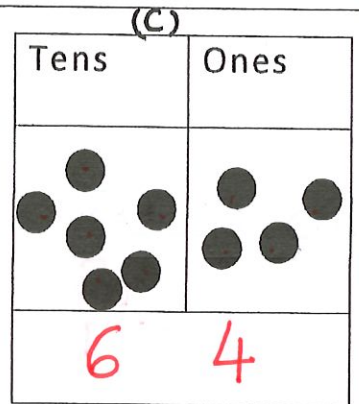
36) Write the matching number for (b)



52

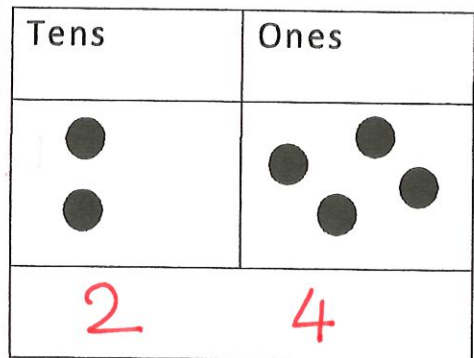


54

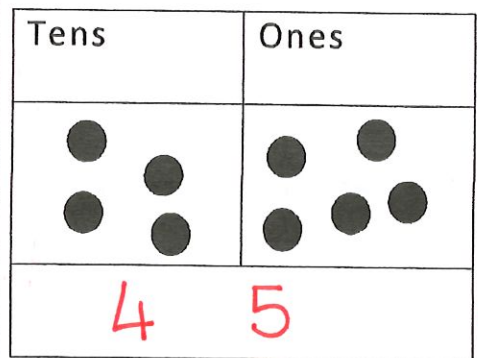


64

Write the matching number for



=24

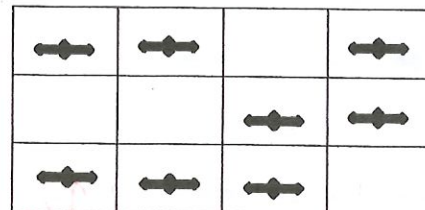


=45

37) Which number is one hundred (a)

- six
- 106
  - 601
  - 160
  - 610

What fraction is filled (b)



8/12

8 out of 12



38)

I had 19 coins. I lost 15 of them. How many are left with me?

$$\begin{array}{r} 19 \\ -15 \\ \hline 4 \end{array}$$

4 Coins

There are 22 tomatoes on a plant. I plucked 4 tomatoes

How many tomatoes are left on the plant?

$$\begin{array}{r} 22 \\ -4 \\ \hline 18 \end{array}$$

18 Tomatoes

39)

Classify the following numbers as odd or even

55, 64, 23, 77, 85, 110, 40, 68, 12, 88, 13, 27,

Odd	55	23	77	85	13	27
Even	64	12	68	110	40	88

40)

Thirty (30) dogs are barking. Ten (10) more dogs start to bark. How many dogs are barking?

$$\begin{array}{r} 30 \\ +10 \\ \hline 40 \end{array}$$

40 dogs

A shop sold 67 cakes last week. This week the shop sold 28 cakes. How many cakes did the shop sell in all?

$$\begin{array}{r} 67 \\ +28 \\ \hline 95 \end{array}$$

95 cakes

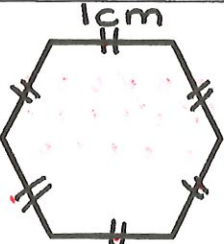
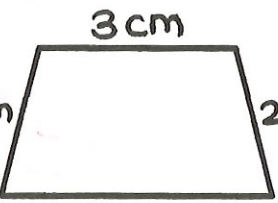
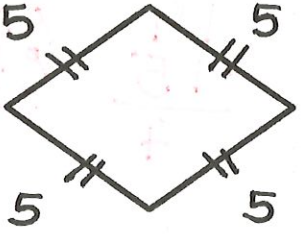
41)

Circle the time that is given on the time line

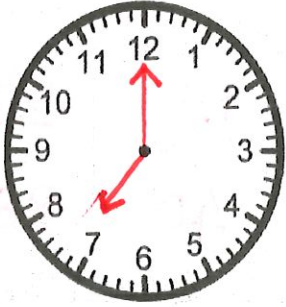


a)	7 o'clock evening	Midnight	AM	Noon	PM
b)	3 o'clock morning	Midnight	AM	Noon	PM
c)	8 o'clock evening	Midnight	AM	Noon	PM
d)	11 o'clock morning	Midnight	AM	Noon	PM



42) Find the perimeter of the following

(a)	(b)	(c)
 <p>Each Side = 1cm</p>		
$1+1+1+1+1+1 = 6\text{cm}$	$2+2+3+5 = 12\text{cm}$ $4+8 = 12\text{cm}$	$5+5+5+5 = 20$ $10+10 = 20$

43) Time

		
7:00	9:00	12 o'clock

44) Who am I?

a) I come <u>between 60 and 70</u> (exactly between)	65
b) I am <u>two less than 20</u>	18
c) I am <u>two more than 24</u>	26
d) I am <u>three less than 19</u>	16
e) I am <u>nine more than 17</u>	26
f) I am <u>three less than 17</u>	14
g) I am <u>five more than 10</u>	15

45) Solve

	c1	c2	c3
a)	$\begin{array}{r} \overset{1}{3} \ 9 \\ + \ 2 \ 1 \\ \hline 6 \ 0 \end{array}$	$\begin{array}{r} 8 \ 3 \\ + \ 2 \ 2 \\ \hline 10 \ 5 \end{array}$	$\begin{array}{r} \overset{1}{4} \ 6 \\ + \ 6 \ 4 \\ \hline 1 \ 1 \ 0 \end{array}$

b)

$\begin{array}{r} \overset{1}{9} \ 3 \\ + \ 8 \\ \hline 1 \ 0 \ 1 \end{array}$	$\begin{array}{r} 4 \ 8 \\ + \ 6 \\ \hline 5 \ 4 \end{array}$	$\begin{array}{r} 6 \ 3 \\ + \ 9 \\ \hline 7 \ 2 \end{array}$
--	---	---

c)

$\begin{array}{r} 7 \ 4 \\ + \ 1 \ 2 \\ \hline 8 \ 6 \end{array}$	$\begin{array}{r} 8 \ 7 \\ + \ 1 \ 2 \\ \hline 9 \ 9 \end{array}$	$\begin{array}{r} 6 \ 6 \\ + \ 1 \ 3 \\ \hline 7 \ 9 \end{array}$
---	---	---

46) How much money is  
5 cents + 7 cents + 5 cents

+ 5 cents	○ ○ ○ ○ ○
+ 7 cents	○ ○ ○ ○ ○ ○ ○
+ 5 cents	○ ○ ○ ○ ○
<u>17 cents</u>	

17 Cents



47) Complete the pattern

a)								
b)								
c)	A	A	D	A	A	D	A	A
d)	A	1	A	2	A	3	A	4
e)	18	19	20	21	22	23		
f)	X	Y	Y	X	Y	Y	X	Y

48) Time

(a)	(b)	(c)
3:00 or 3 o'clock	9:30	12:00 or 12 o'clock



- 49) 20 fish in a pool.  
5 more fish are added to the pool?  
How many in all?

$$\begin{array}{r} + 20 \\ + 5 \\ \hline 25 \end{array}$$

25 Fish

- 50) 14 fish in a pool.  
6 more fish are added to the pool?  
How many in all?

$$\begin{array}{r} + 14 \\ + 6 \\ \hline 20 \end{array}$$

20 Fish

- 51) 12 fish in a pool.  
11 were red.  
How many were not red?

$$\begin{array}{r} 12 \\ - 11 \\ \hline 1 \end{array}$$

1 not Red.

- 52) How many letters are in the word : **CHRISTMAS**

C H R I S T M A S  
1 2 3 4 5 6 7 8 9

9 Letters

- 53) How many letters are in the word : **ABSOLUTE**

8 Letters

- 54) How many letters are in the word : **MISSISSIPPI**

11 Letters

- 55) How much money is  
10 cents + 1 cents + 1 cents + 10 cents

$$10 + 1 + 1 + 10 = 20 + 2 = 22$$

22 Cents

56) Adam has 3 red crayons, 9 blue crayons, and 7 green crayons. How many crayons does Adam have?

3 Red  
9 Blue  
7 green

$$3 + 7 = 10 + 9 = 19$$

19

19 Crayons

Peter has 13 black cubes, 3 blue cubes, and 4 white cubes. How many cubes does Peter have?

13 black + 3 blue + 4 white  
 $13 + 7 = 20$

20 Cubes

57) There are 8 marbles in a jar. 4 marbles are green. The rest are orange. How many marbles are orange?



4 Orange marbles

Marsha saw 16 frogs in a pond. 9 frogs hop away. How many frogs are left in the pond? Write a number sentence.

$$16 - 9 = 7$$

7 frogs

58) There were 18 birds in the tree. 7 flew away. How many birds are in the tree now? Write a number sentence.

$$18 - 7 = 11$$

11 Birds

Molly has 25 suckers. How many groups of 10 could she make? Draw the suckers in the box below.



Tens

2

Ones

5

2 groups of 10

59) Sherry solved a subtraction problem. She used  $6 + 9 = 15$  to help her solve it. Which subtraction problem did she solve?

(A)  $6 - 9 = 15$

(B)  $9 - 5 = 4$

(C)  $15 - 6 = 9$

(D)  $5 + 10 = 15$

C

Katie solved a subtraction problem. She used  $6 + 7 = 13$  to help her solve it. Which subtraction problem did she solve?

(A)  $13 - 6 = 7$

(B)  $13 - 5 = 8$

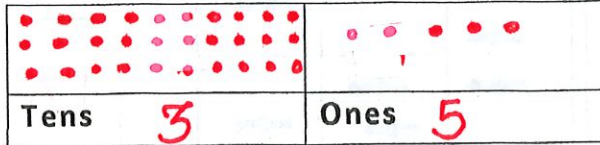
(C)  $10 - 6 = 4$

(D)  $6 - 5 = 1$

A

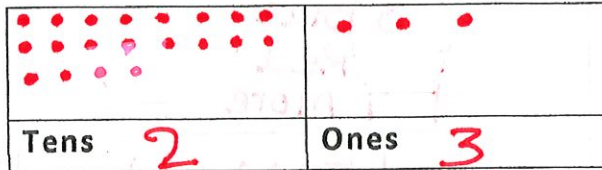


60) Jen has granola bars for her party. She has 3 packages of 10. She also has 5 extra bars.



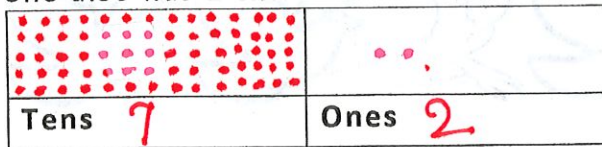
How many in all? **35 bars**

Molly has 23 suckers. How many groups of 10 could she make? Draw the suckers in the box below.




**2 groups**

61) Jen has granola bars for her party. She has 7 packages of 10. She also has 2 extra bars.



How many in all? **72 bars**

Molly has 43 suckers. How many groups of 10 could she make? Draw the suckers in the box below.



**4 groups**

62) Adam has 7 red crayons, 5 blue crayons, and 5 green crayons. How many crayons does Adam have?

$$7 + 5 + 5 = 7 + 10$$

**17 Crayons**

Peter has 9 black cubes, 3 blue cubes, and 4 white cubes. How many cubes does Peter have?

$$\begin{array}{r} 9 \text{ black} \\ 3 \text{ Blue} \\ 4 \text{ white} \\ \hline 16 \end{array}$$

**16 Cubes**

63) Sherry solved an addition problem. She used  $11 - 5 = 6$  to help her solve it. Which addition problem did she solve?

- (A)  $7 + 4 = 11$
- (B)  $5 + 4 = 9$
- (C)  **$6 + 5 = 11$**
- (D)  $5 + 14 = 19$

**C**

Katie solved an addition problem. She used  $13 - 5 = 8$  to help her solve it. Which addition problem did she solve?

- (A)  **$8 + 5 = 13$**
- (B)  $3 + 7 = 10$
- (C)  $10 - 6 = 4$
- (D)  $6 - 5 = 1$

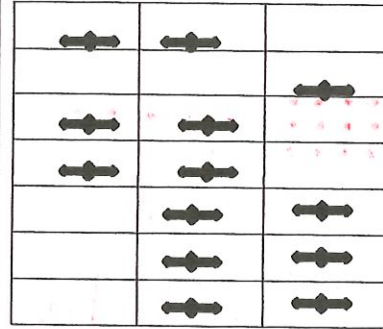
**A**

64) There are 3 blue marbles and 5 red marbles in the bag. Maria put in 7 more marbles. How many marbles are in the bag now?

3 Blue  
+ 5 Red  
+ 7 More

15 Marbles

What fraction is filled



$\frac{13}{21}$

65) What is the correct answer for the picture?



$3 + 4 = 7$	$5 + 2 = 7$	$2 + 5 = 7$	$3 + 1 = 4$
-------------	-------------	-------------	-------------

66) What number lies exactly between?

10 and 20	27 and 29	13 and 15	100 and 102
15	28	14	101

67) Seven cats and four dogs together equals how many animals?

7 cats  
4 dogs  
11

11 Animals

68) How many fewer cats are in the picture than the dogs




6 dogs  
3 cats

3 cats Fewer



69) If three cats live in one house. How many cats in 5 houses?



15 cats

70) Are the following sentences true? ( Yes / No)

A	10 is more than 20	NO
B	There are seven days in a week	YES
C	seven + nine = sevensine	NO
D	Monday comes after wednesday every week	NO
E	15 is an odd number	YES
F	5 is the digit in tens place in the number 75	NO
G	7 is the digit in ones place in the number 77	YES

71) What number is 4 more than ?

10	20	23	25
10 + 4 14	20 + 4 24	23 + 4 27	25 + 4 29

72) How much money is 1 Quarter + 1 cents

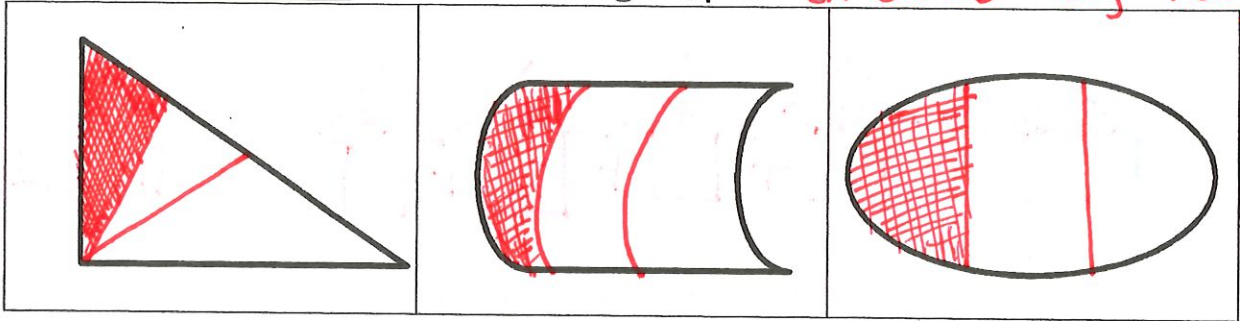
25 Cents  
+ 1 Cents

26 Cents

73) What number is 5 less than ?

10	20	23	25
10 - 5 5	20 - 5 15	23 - 5 18	25 - 5 20

74) Color only one third of the following shapes (Answers May Vary)



75) Complete the pattern

a)

50	51	52	53	54	55	56
----	----	----	----	----	----	----

b)

100	101	102	103	104	105	106
-----	-----	-----	-----	-----	-----	-----

76) What comes after

200	201	27	28	70	71
46	47	79	80	35	36

77) What is ?

(a)	(b)	(c)	(d)
Twice of 4	Twice of 5	Thrice of 2	Thrice of 5
4 + 4 8	5 + 5 10	2 + 2 + 2 6	5 + 5 + 5 15



descending → Big to Small

78)

Arrange in descending order

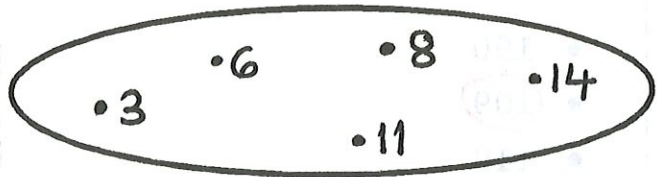

1. 109, 901, 910, 190

910	901	190	109
-----	-----	-----	-----

2. 656, 900, 84, 99

900	656	99	84
-----	-----	----	----

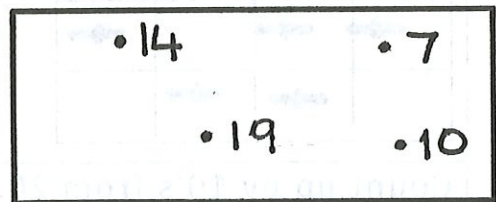
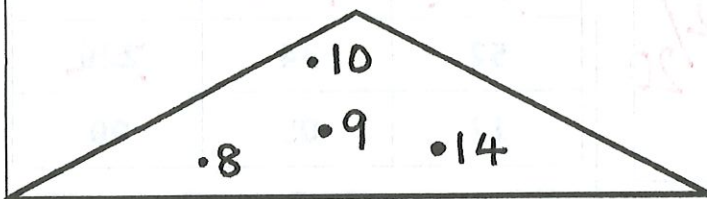
79)



- The number is both in the rectangle and the oval
- It is an odd number
- What number is it?

11

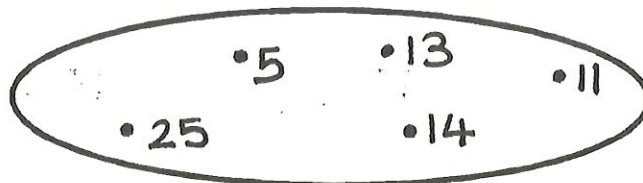

80)



- The number is not in the Rectangle
- It is an even number
- It is less than 20
- What number is it?

8

81)



- The number is both in the rectangle and the oval
- It is greater than 13
- What number is it?

25

82)

Which number is one hundred nine

- 190
- 109
- 119
- 191

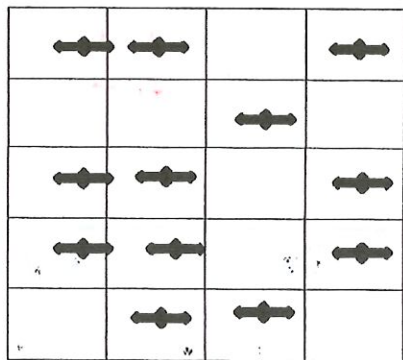
What is the missing number:  
Twelve, Thirteen, fourteen,

'-----

Fifteen

83)

What fraction is filled



12 out of 20

12/20

Cross ( X ) the numbers more than 100

67	82	46
<del>118</del>	<del>315</del>	84
52	34	<del>229</del>
17	05	90

84)

Count up by 10's from 20

20	30	40
50	60	70
80	90	100

even numbers between 40 and 60

42	44	46
48	50	52
54	56	58



85)

Mandy made 11 pancakes in the morning. She made 11 pancakes in the evening. How many pancakes did she make in all?

$$11 + 11 = 22$$

22 Pancakes

Cost of one pen is 7 dollars.

$$\text{Cost of 2 pens} = 7 + 7 = 14$$

\$14

86)

**Different ways of making 20**

$$13 + 7 = 20$$

$$23 - 3 = 20$$

$$19 + 1 = 20$$

$$15 + 5 = 20$$


Cost of one box is 4 dollars.

$$\text{Cost of 3 boxes} = 4 + 4 + 4 \text{ dollars}$$


12 Dollars

87)


Draw a segment shorter than the given segment



Draw two squares larger than the given square

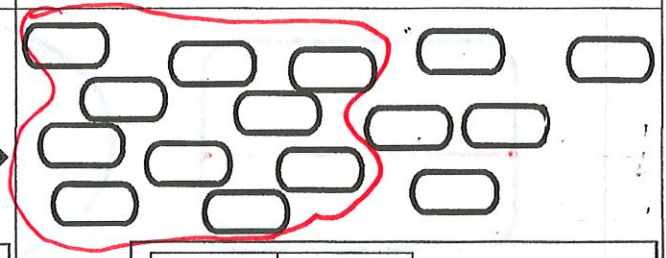


88)



Tens	ones
1	7


17



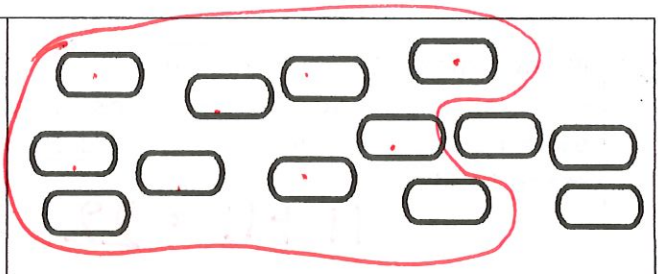
Tens	ones
1	5

15

89)






Tens	ones	13
1	3	



Tens	ones	13
1	3	

90)

Color one half



91)

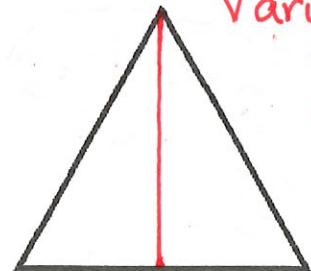
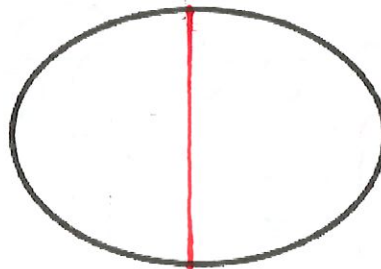

What is ?

Five less than 17	Three more than 14	two less than 14
12	17	12

92)

Divide into two equal parts by drawing a line

(Answers May vary)





93)

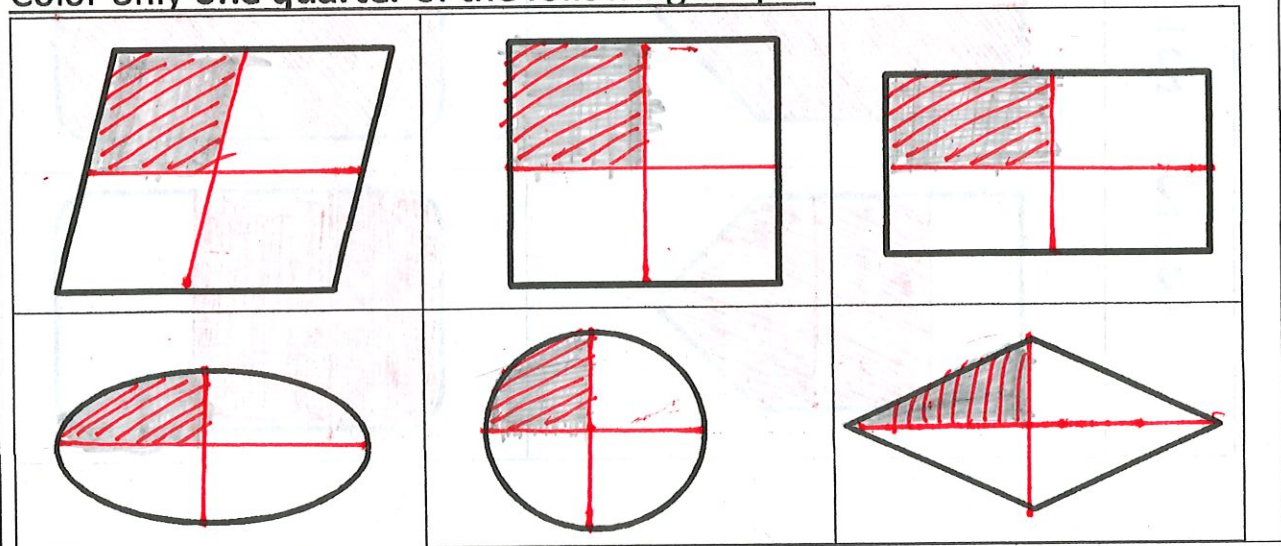
April 2015						
Sunday	Monday	Tuesday	Wednesday	Thursday	Friday	Saturday
	1	2	3	4	5	6
7	8	9	10	11	12	13
14	15	16	17	18	19	20
21	22	23	24	25	26	27
28	29	30				

Answer the following questions

a) When is the <u>2<sup>nd</sup> Monday</u> of the month? <i>April 8<sup>th</sup>, 2015</i>	b) What is the day on <u>April 18<sup>th</sup></u> ? <i>Thursday.</i>
c) When is the <u>4<sup>th</sup> Thursday</u> of the month? <i>April 25<sup>th</sup>, 2015</i>	d) What year is it? <i>2015</i>
e) When is the <u>3<sup>rd</sup> Tuesday</u> of the month? <i>April 16<sup>th</sup>, 2015</i>	f) What day comes on April 7 <sup>th</sup> ? <i>Sunday</i>
g) How many days are in April? <i>30 Days</i>	h) What month comes after April? <i>May.</i>

94)

Color only one quarter of the following shapes

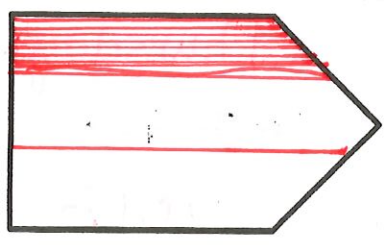

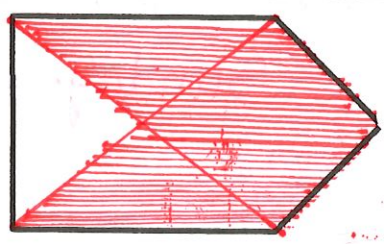

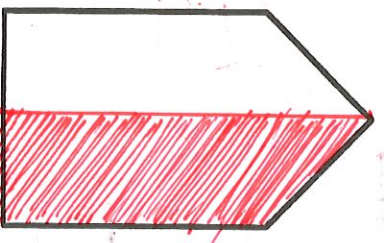

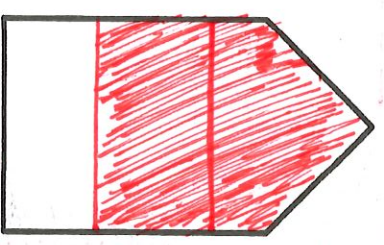



q5)

Color numbers more than 89		
707	82	160
251	65	91
44	91	109
108	07	110

Shade the numbers less than 120		
<del>67</del>	<del>82</del>	<del>46</del>
<del>118</del>	315	<del>84</del>
<del>52</del>	<del>36</del>	229
<del>27</del>	<del>07</del>	<del>90</del>

q6) Shade (color) the fraction given

$\frac{1}{3}$		
$\frac{3}{4}$		
$\frac{1}{2}$		
$\frac{2}{3}$		



97)

December 2017						
Sunday	Monday	Tuesday	Wednesday	Thursday	Friday	Saturday
		1	2	3	4	5
6	7	8	9	10	11	12
13	14	15	16	17	18	19
20	21	22	23	24	25	26
27	28	29	30	31		

Answer the following questions

a) When is the <u>3rd Tuesday</u> of the month?	Dec 15 <sup>th</sup> , 2017
b) When is the <u>2<sup>nd</sup> Monday</u> of the month?	Dec 14 <sup>th</sup> , 2017
c) When is the <u>last Saturday</u> of the month?	Dec 26 <sup>th</sup> , 2017
d) What year is it?	2017
e) How many days are in December 2017?	31 Days
f) What day is on December 21 <sup>st</sup> ?	Monday
g) What day is on December 17 <sup>th</sup> ?	Thursday
h) How many Mondays are there in all?	4 Monday's

	C1	C2	C3																																				
98)																																							
a)	<table border="1"> <thead> <tr><th></th><th>T</th><th>U</th></tr> </thead> <tbody> <tr><td></td><td>5</td><td>2</td></tr> <tr><td>+</td><td>2</td><td>9</td></tr> <tr><td></td><td>8</td><td>1</td></tr> </tbody> </table>		T	U		5	2	+	2	9		8	1	<table border="1"> <thead> <tr><th></th><th>T</th><th>U</th></tr> </thead> <tbody> <tr><td></td><td>7</td><td>2</td></tr> <tr><td>-</td><td>3</td><td>0</td></tr> <tr><td></td><td>4</td><td>2</td></tr> </tbody> </table>		T	U		7	2	-	3	0		4	2	<table border="1"> <thead> <tr><th></th><th>T</th><th>U</th></tr> </thead> <tbody> <tr><td></td><td>2</td><td>2</td></tr> <tr><td>+</td><td>1</td><td>7</td></tr> <tr><td></td><td>3</td><td>9</td></tr> </tbody> </table>		T	U		2	2	+	1	7		3	9
	T	U																																					
	5	2																																					
+	2	9																																					
	8	1																																					
	T	U																																					
	7	2																																					
-	3	0																																					
	4	2																																					
	T	U																																					
	2	2																																					
+	1	7																																					
	3	9																																					
b)	<table border="1"> <thead> <tr><th></th><th>T</th><th>U</th></tr> </thead> <tbody> <tr><td></td><td>1</td><td>8</td></tr> <tr><td>+</td><td>4</td><td>5</td></tr> <tr><td></td><td>6</td><td>3</td></tr> </tbody> </table>		T	U		1	8	+	4	5		6	3	<table border="1"> <thead> <tr><th></th><th>T</th><th>U</th></tr> </thead> <tbody> <tr><td></td><td>2</td><td>8</td></tr> <tr><td>+</td><td>3</td><td>5</td></tr> <tr><td></td><td>6</td><td>3</td></tr> </tbody> </table>		T	U		2	8	+	3	5		6	3	<table border="1"> <thead> <tr><th></th><th>T</th><th>U</th></tr> </thead> <tbody> <tr><td></td><td>4</td><td>8</td></tr> <tr><td>-</td><td>3</td><td>5</td></tr> <tr><td></td><td>1</td><td>3</td></tr> </tbody> </table>		T	U		4	8	-	3	5		1	3
	T	U																																					
	1	8																																					
+	4	5																																					
	6	3																																					
	T	U																																					
	2	8																																					
+	3	5																																					
	6	3																																					
	T	U																																					
	4	8																																					
-	3	5																																					
	1	3																																					
c)	<table border="1"> <thead> <tr><th></th><th>T</th><th>U</th></tr> </thead> <tbody> <tr><td></td><td>6</td><td>7</td></tr> <tr><td>+</td><td>1</td><td>4</td></tr> <tr><td></td><td>8</td><td>1</td></tr> </tbody> </table>		T	U		6	7	+	1	4		8	1	<table border="1"> <thead> <tr><th></th><th>T</th><th>U</th></tr> </thead> <tbody> <tr><td></td><td>8</td><td>7</td></tr> <tr><td>-</td><td>4</td><td>4</td></tr> <tr><td></td><td>4</td><td>3</td></tr> </tbody> </table>		T	U		8	7	-	4	4		4	3	<table border="1"> <thead> <tr><th></th><th>T</th><th>U</th></tr> </thead> <tbody> <tr><td></td><td>6</td><td>9</td></tr> <tr><td>-</td><td>3</td><td>4</td></tr> <tr><td></td><td>3</td><td>5</td></tr> </tbody> </table>		T	U		6	9	-	3	4		3	5
	T	U																																					
	6	7																																					
+	1	4																																					
	8	1																																					
	T	U																																					
	8	7																																					
-	4	4																																					
	4	3																																					
	T	U																																					
	6	9																																					
-	3	4																																					
	3	5																																					
d)	<table border="1"> <thead> <tr><th></th><th>T</th><th>U</th></tr> </thead> <tbody> <tr><td></td><td>2</td><td>8</td></tr> <tr><td>+</td><td>2</td><td>4</td></tr> <tr><td></td><td>5</td><td>2</td></tr> </tbody> </table>		T	U		2	8	+	2	4		5	2	<table border="1"> <thead> <tr><th></th><th>T</th><th>U</th></tr> </thead> <tbody> <tr><td></td><td>3</td><td>8</td></tr> <tr><td>+</td><td>4</td><td>3</td></tr> <tr><td></td><td>8</td><td>1</td></tr> </tbody> </table>		T	U		3	8	+	4	3		8	1	<table border="1"> <thead> <tr><th></th><th>T</th><th>U</th></tr> </thead> <tbody> <tr><td></td><td>6</td><td>8</td></tr> <tr><td>-</td><td>5</td><td>1</td></tr> <tr><td></td><td>1</td><td>7</td></tr> </tbody> </table>		T	U		6	8	-	5	1		1	7
	T	U																																					
	2	8																																					
+	2	4																																					
	5	2																																					
	T	U																																					
	3	8																																					
+	4	3																																					
	8	1																																					
	T	U																																					
	6	8																																					
-	5	1																																					
	1	7																																					



	C1	C2	C3																																				
99)																																							
a)	<table border="1"> <tr><td></td><td>T</td><td>U</td></tr> <tr><td></td><td>3</td><td>6</td></tr> <tr><td>-</td><td>2</td><td>4</td></tr> <tr><td></td><td>1</td><td>2</td></tr> </table>		T	U		3	6	-	2	4		1	2	<table border="1"> <tr><td></td><td>T</td><td>U</td></tr> <tr><td></td><td>4</td><td>7</td></tr> <tr><td>-</td><td>2</td><td>4</td></tr> <tr><td></td><td>2</td><td>3</td></tr> </table>		T	U		4	7	-	2	4		2	3	<table border="1"> <tr><td></td><td>T</td><td>U</td></tr> <tr><td></td><td>5</td><td>4</td></tr> <tr><td>-</td><td>5</td><td>0</td></tr> <tr><td></td><td>0</td><td>4</td></tr> </table>		T	U		5	4	-	5	0		0	4
	T	U																																					
	3	6																																					
-	2	4																																					
	1	2																																					
	T	U																																					
	4	7																																					
-	2	4																																					
	2	3																																					
	T	U																																					
	5	4																																					
-	5	0																																					
	0	4																																					
b)	<table border="1"> <tr><td></td><td>T</td><td>U</td></tr> <tr><td></td><td>2</td><td>0</td></tr> <tr><td>-</td><td>2</td><td>0</td></tr> <tr><td></td><td>0</td><td>0</td></tr> </table>		T	U		2	0	-	2	0		0	0	<table border="1"> <tr><td></td><td>T</td><td>U</td></tr> <tr><td></td><td>7</td><td>0</td></tr> <tr><td>-</td><td>1</td><td>0</td></tr> <tr><td></td><td>6</td><td>0</td></tr> </table>		T	U		7	0	-	1	0		6	0	<table border="1"> <tr><td></td><td>T</td><td>U</td></tr> <tr><td></td><td>4</td><td>0</td></tr> <tr><td>-</td><td>2</td><td>0</td></tr> <tr><td></td><td>2</td><td>0</td></tr> </table>		T	U		4	0	-	2	0		2	0
	T	U																																					
	2	0																																					
-	2	0																																					
	0	0																																					
	T	U																																					
	7	0																																					
-	1	0																																					
	6	0																																					
	T	U																																					
	4	0																																					
-	2	0																																					
	2	0																																					
c)	<table border="1"> <tr><td></td><td>T</td><td>U</td></tr> <tr><td></td><td>4</td><td>9</td></tr> <tr><td>-</td><td>2</td><td>7</td></tr> <tr><td></td><td>2</td><td>2</td></tr> </table>		T	U		4	9	-	2	7		2	2	<table border="1"> <tr><td></td><td>T</td><td>U</td></tr> <tr><td></td><td>4</td><td>5</td></tr> <tr><td>-</td><td>2</td><td>2</td></tr> <tr><td></td><td>2</td><td>3</td></tr> </table>		T	U		4	5	-	2	2		2	3	<table border="1"> <tr><td></td><td>T</td><td>U</td></tr> <tr><td></td><td>3</td><td>6</td></tr> <tr><td>-</td><td>3</td><td>2</td></tr> <tr><td></td><td>0</td><td>4</td></tr> </table>		T	U		3	6	-	3	2		0	4
	T	U																																					
	4	9																																					
-	2	7																																					
	2	2																																					
	T	U																																					
	4	5																																					
-	2	2																																					
	2	3																																					
	T	U																																					
	3	6																																					
-	3	2																																					
	0	4																																					
d)	<table border="1"> <tr><td></td><td>T</td><td>U</td></tr> <tr><td></td><td>3</td><td>8</td></tr> <tr><td>-</td><td>2</td><td>4</td></tr> <tr><td></td><td>1</td><td>4</td></tr> </table>		T	U		3	8	-	2	4		1	4	<table border="1"> <tr><td></td><td>T</td><td>U</td></tr> <tr><td></td><td>6</td><td>7</td></tr> <tr><td>-</td><td>4</td><td>7</td></tr> <tr><td></td><td>2</td><td>0</td></tr> </table>		T	U		6	7	-	4	7		2	0	<table border="1"> <tr><td></td><td>T</td><td>U</td></tr> <tr><td></td><td>5</td><td>6</td></tr> <tr><td>-</td><td>4</td><td>4</td></tr> <tr><td></td><td>1</td><td>2</td></tr> </table>		T	U		5	6	-	4	4		1	2
	T	U																																					
	3	8																																					
-	2	4																																					
	1	4																																					
	T	U																																					
	6	7																																					
-	4	7																																					
	2	0																																					
	T	U																																					
	5	6																																					
-	4	4																																					
	1	2																																					

100)  $\frac{3}{6}$  of the circles are **A**, another  $\frac{1}{6}$  are **B**  
 and the remaining are **C**

groups of 6.

101)  $\frac{1}{3}$  of the circles are **A**, another  $\frac{1}{3}$  are **B**  
 and the remaining are **C**

groups of 3.

102)  $\frac{1}{4}$  of the circles are **A**, another  $\frac{1}{4}$  are **B**  
 and the remaining are **C**

groups of 4

103)  $\frac{2}{4}$  of the circles are **A**, another  $\frac{1}{4}$  are **B**  
 and the remaining are **C**



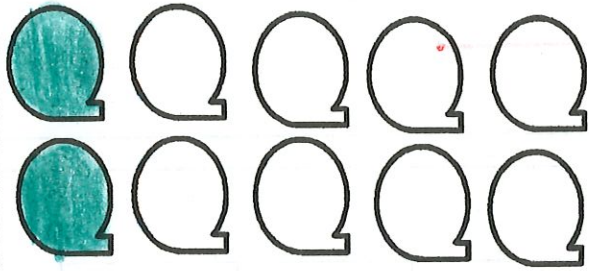
104)

Solve

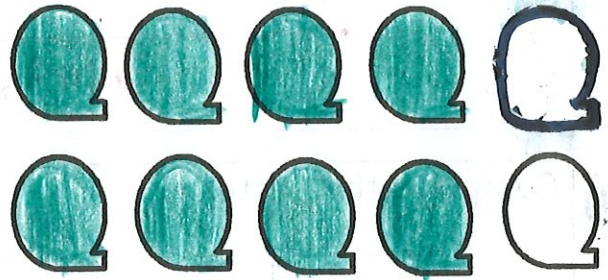
a	b	c	d
$\begin{array}{r} 33 \\ + 65 \\ \hline \end{array}$	$\begin{array}{r} 65 \\ - 33 \\ \hline \end{array}$	$\begin{array}{r} 81 \\ + 17 \\ \hline \end{array}$	$\begin{array}{r} 88 \\ - 17 \\ \hline \end{array}$
98	32	98	71

105)

Color  $\frac{1}{5}$  of the following shapes

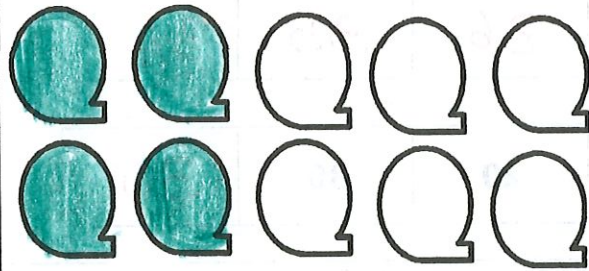


Color  $\frac{4}{5}$  of the following shapes

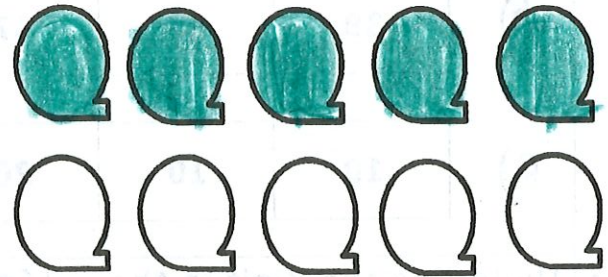


106)

Color  $\frac{2}{5}$  of the following shapes

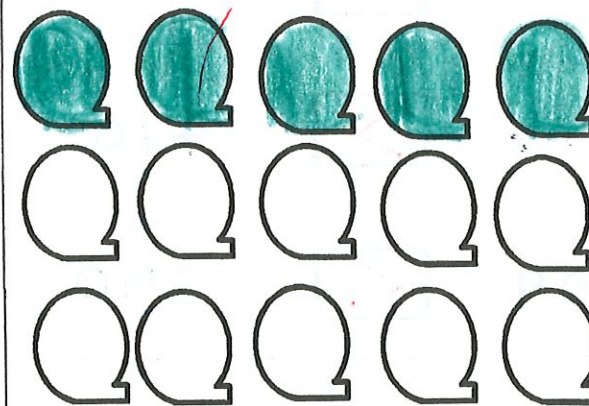


Color  $\frac{1}{2}$  of the following shapes




107)

Color  $\frac{1}{3}$  of the following shapes




Color  $\frac{2}{5}$  of the following shapes



108) Draw a segment of length


2 inches



7 centimeters



3 inches



109) Complete the pattern

a)

70	80	90	100	110	120
----	----	----	-----	-----	-----

b)

39	38	37	36	35	34
----	----	----	----	----	----

c)

10	10	20	20	30	30
----	----	----	----	----	----

110) Underline the digit in the Units place

40 <u>9</u>	13 <u>4</u>
90 <u>0</u>	23 <u>4</u>

Compare ( $>$ ,  $<$  or  $=$ )

532  $>$  400

644  $>$  476

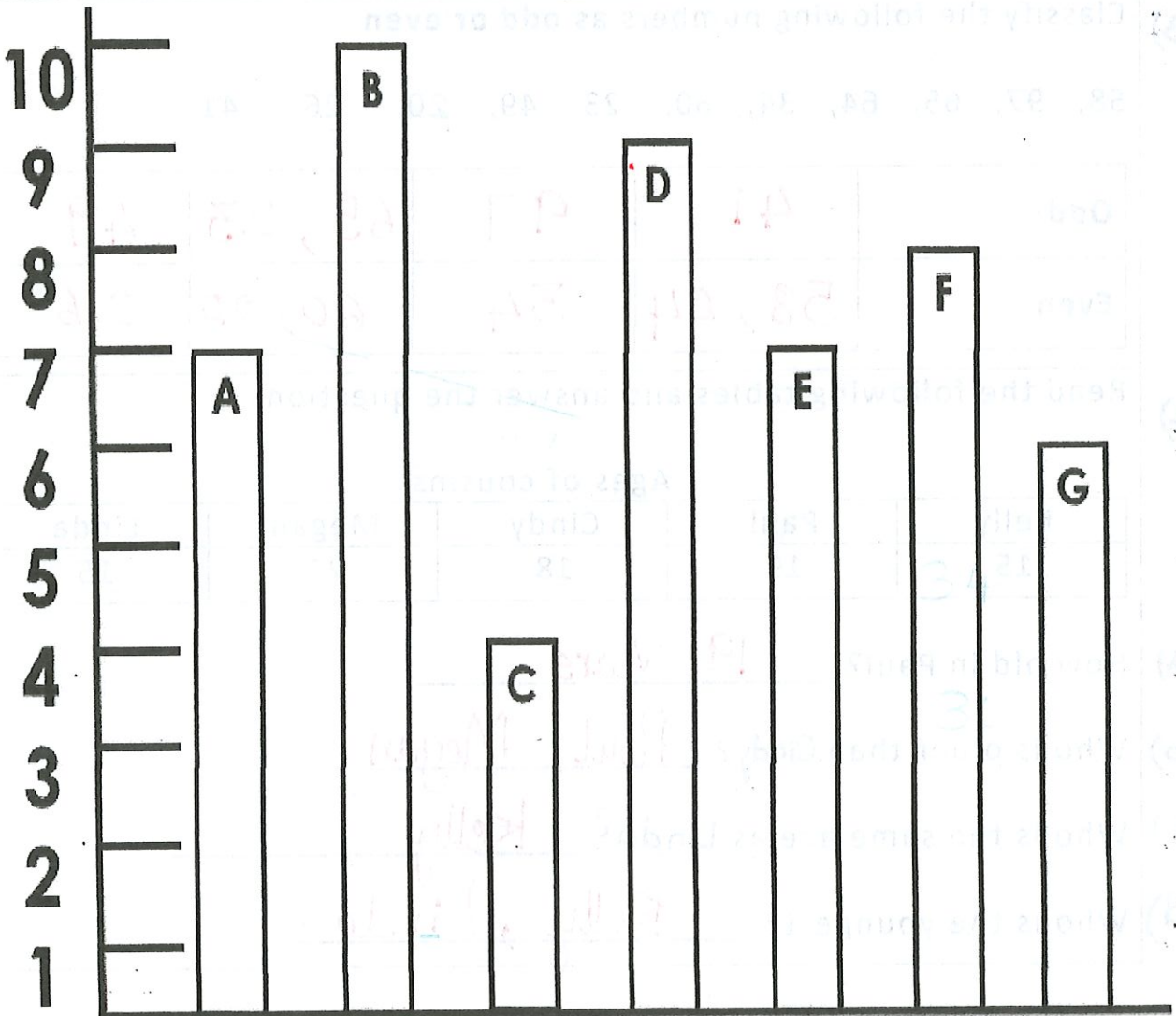
209  $<$  290



111)

1. The tallest tower is B
2. The shortest tower is C
3. 2 towers that are the same size are A and E
4. F is twice as big as C

5. B is 6 units taller than C
6. G is 2 units shorter than F.
7. B is taller than D
8. C is shorter than G
9. The 2nd tallest tower is D



112) Danny has 22 ice -creams with him. If mom got 15 more ice creams. What is the total number of ice -creams now?

$$\begin{array}{r} + 22 \\ 15 \\ \hline 37 \end{array}$$

37 icecream

Sandy has 4 teddies. Sara gives her 2 more. Tina brings 3 more for her. How many teddies does she have now?

$$4 + 2 + 3 = 6 + 3$$

9 teddies

113) Classify the following numbers as odd or even

58, 97, 65, 64, 34, 60, 23, 49, 20, 26, 41

Odd	41	97	65, 23	49
Even	58, 64	34	60, 20	26

114) Read the following tables and answer the questions

Ages of cousins

Kelly	Paul	Cindy	Megan	Linda
15	19	18	21	15

- a) How old in Paul? 19 years
- b) Who is older than Cindy? Paul, Megan
- c) Who is the same age as Linda? Kelly
- d) Who is the youngest? Kelly, Linda.



- 115) a) • 20 pennies + 10 pennies = 30 pennies  
 b) • 16 pennies - 11 pennies = 5 pennies  
 c) • 30 days - 12 days = 18 days

116) Cost of one apple is 21 cents. What is the cost of 2 apples

$$\begin{array}{r} + 21 \\ + 21 \\ \hline 42 \end{array}$$


42 cents

Mark had 15 balloons. If 7 balloons flew away, how many balloons are left with Mark?

$$\begin{array}{r} 15 \\ - 7 \\ \hline 8 \end{array}$$

8 balloons

- 117) a) • One dollar makes 100 cents  
 b) • One year = 365 days  
 c) • One month = 30 days  
 d) • One nickel = 5 cents  
 e) • One half = One part out of two parts




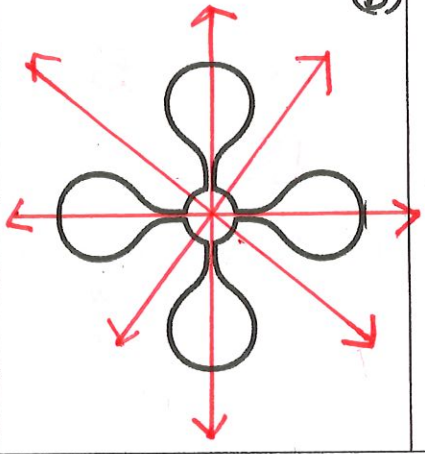

118) a) 3 tens + 9 ones = 39

b) 4 tens + 7 ones = 40 + 7 = 47

c) 5 tens + 5 ones = 50 + 5 = 55

d) 5 ones + 2 tens = 20 + 5 = 25

119) Draw the axis of symmetry for the following shapes

<p>(a)</p> 	<p>(b)</p> 	<p>(c)</p>  <p>NO AXIS of Symmetry</p>
--	---	---

120) Arrange in Ascending Order (small to big)  
50, 140, 124, 80, 62

a)

50	62	80	124	140
----	----	----	-----	-----

120 , 112 , 110 , 101 , 200

b)

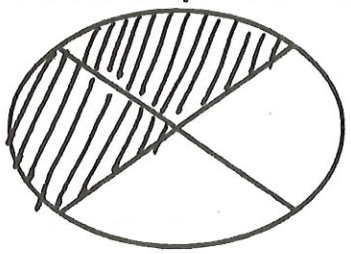
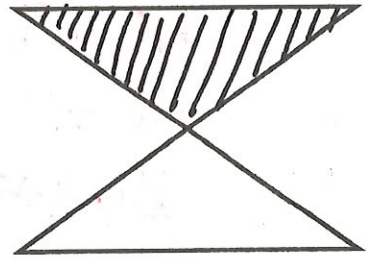
101	110	112	120	200
-----	-----	-----	-----	-----

121) Write in words: 200 Two hundred

49 forty Nine

38 Thirty Eight

122) How much part is shaded

<p>(a)</p> 	<div style="border: 1px solid black; padding: 10px; width: 60px; margin: auto;"> <math>\frac{2}{4}</math> </div>	<p>(b)</p> 	<div style="border: 1px solid black; padding: 10px; width: 60px; margin: auto;"> <math>\frac{1}{2}</math> </div>
--	--	---	--



(a)

(b)

123)

Andy made a tower with thirty blocks. He added some more blocks and now he has 50 blocks. How many did he have to add?

$$\begin{array}{r} 50 \\ - 30 \\ \hline 20 \end{array}$$

20 Blocks

Lucy put twenty shells in her bucket. She found some more shells and now she has fifty shells. How many more did she find?

$$\begin{array}{r} 50 \\ - 20 \\ \hline 30 \end{array}$$

30 Shells

124)

If a hen laid 2 eggs every day for 1 week. How many eggs would there be in 1 week?

$$\begin{array}{r} 2+2+2+2+2+2+2 \\ \hline 4+4+4+2 \\ \hline 8+6 \end{array}$$

14 Eggs

You have 20 marbles but you gave your friend 9. Now how many marbles are left with you now?

$$\begin{array}{r} 20 \\ - 9 \\ \hline 11 \end{array}$$

11 Marbles

125)

Jake has 7 pennies and Jill gave him 9 more. How many does he have now?

$$\begin{array}{r} 7 \\ + 9 \\ \hline 16 \end{array}$$

16 Pennies

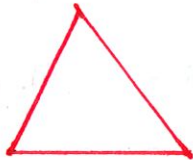
Finish the counting pattern:

24, 21, 18, 15, 12, \_\_\_\_\_

9	6	3
---	---	---

126)

Draw me, I have 3 vertices and 3 sides



Finish the pattern and state the rule

90, 80, 70, 60, 50 40 30

Take	away	Ten.
------	------	------

(a)

(b)

127)

Maria is 8 years old. Her brother Nikil is 2 years old. How much older is Maria than her brother Nikil?

$$\begin{array}{r} 8 \\ - 2 \\ \hline 6 \end{array}$$

6 Years

Lee has 11 board games. Lee has 5 more board games than Darnel. How many board games does Darnel have?

$$\begin{array}{r} 11 \\ - 5 \\ \hline 6 \end{array}$$

6 games

128)

Maria has 4 more fish in her tank than Shanika. Shanika has 6 fish. How many fish does Maria have in her tank?

$$\begin{array}{r} 6 \\ + 4 \\ \hline 10 \end{array}$$

10 fish

Emi planted 12 flowers. Rose planted 3 fewer flowers than Emi. How many flowers did Rose plant?

$$\begin{array}{r} 12 \\ - 3 \\ \hline 9 \end{array}$$

9 flowers

129)

Kim went to 15 baseball games this summer. Julio went to 10 baseball games. How many more games did Kim go to than Julio?

$$\begin{array}{r} 15 \\ - 10 \\ \hline 5 \end{array}$$

5 games

Rose found 12 shells on the beach. Lee found 6 fewer shells than Rose. How many shells did Lee find on the beach?

$$\begin{array}{r} 12 \\ - 6 \\ \hline 6 \end{array}$$

6 shells

130)

Write the number

a)

2 ones 3 tens = 32

9 tens 2 ones = 92

b)

4 ones 5 tens = 54

4 tens 3 ones = 43

c)

6 ones 2 tens = 26

8 tens 9 ones = 89

d)

7 ones 3 tens = 37

2 tens 0 ones = 20